



1. Halloween candy goes on sale 65% off at Walgreens the day after Halloween. How much will a bag of candy that is regularly \$4.99 cost on the day after Halloween?



2. Tiffany answered 90% of the questions on her math test correctly. If there were 50 questions, how many did she answer correctly?



3. A necklace usually sells for \$18, but it is on sale for 15% off. What is the sale price of the necklace?



4. The cost of Ken's car wash was \$23.95. If he wants to give his detailer a 15% tip, how much money will he spend in all?



5. Cody has \$700 in an account that earns 4% interest each year. How much interest will he earn over two years?



6. A salesman needed to sell a four-wheeler. He priced it at \$3500 the first day it was on the market. The second day he reduced the price by 10%. What was the cost after the reduction?



7. An item originally costs \$16.95, and is on sale for 22% off the original price. The sales tax is 6.5%. Find the cost of the item.



8. Marybeth has lunch at a restaurant. If her bill was \$14.41, and she wants to leave an 18% tip, how much money will she spend in all?




9. Todd deposited \$900 in an account that earns 6% interest each year. How much interest will he earn in a year?




10. Fifteen percent of the 20 players on the soccer team are new. How many players are new?



11. A couch is priced \$1725, and is on sale for 25% off. After the discount and 7.5% sales tax, what is the total cost of the couch?



12. Mrs. Martin bought a microwave that was originally priced at \$225. She recieved a 30% discount and also paid 6.8% sales tax. How much did she pay for the microwave?



13. Ms. Melton got her hair cut for \$26. If she leaves a 15% tip, how much does the cut cost her in all?



14. A watch is priced \$79.99, and is on sale 40% off. What is the total price of the watch after the discount and 8.2% sales tax?



15. A box of expo markers is priced \$12.49. I receive a 10% teacher discount. How much will I pay for the markers after my discount and 7% sales tax?



16. Carter's Spiderman costume was priced \$29.99, but was on sale for 15% off. What is the total price of the costume after the discount and 6% sales tax?



17. REVIEW: Martha can run $\frac{2}{3}$ mile in $\frac{1}{8}$ of an hour. What is her speed in miles per hour?



18. REVIEW: Dog food is priced \$2 for 3 cans, \$3 for 5 cans, or \$10 for 20 cans. Is the price of dog food proportional to the number of cans purchased? HOW DO YOU KNOW?

